

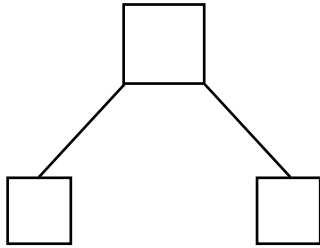


NAME \_\_\_\_\_ DATE \_\_\_\_\_

## ADDITION (USING QUICK TENS AND ONES)

Draw using quick tens and ones. Complete the number bond and write the sum in the place value chart and the number sentence.

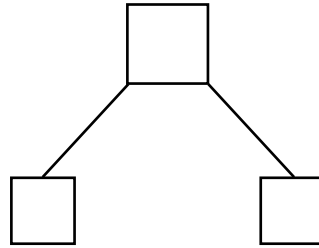
1)  $20 + 7 = \underline{\quad}$



Tens	Ones

+ =

2)  $30 + 6 = \underline{\quad}$

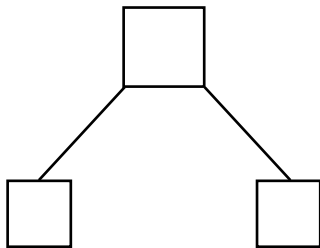


Tens	Ones

+ =

---

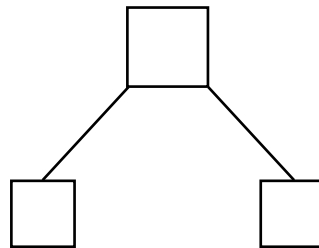
3)  $20 + 5 = \underline{\quad}$



Tens	Ones

+ =

4)  $30 + 7 = \underline{\quad}$



Tens	Ones

+ =